







Problem of the Week

Problem A

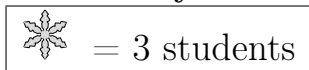
Winter Fun

Ben asked his classmates what their favourite activities were during the winter. The following chart shows the results.

Survey Results

Building a Snowman	  
Sledding	   
Skiing	
Skating	 

Key



Which of the following statements are true about the chart?

- a) Six fewer students like skating than like sledding.
- b) One more student likes building a snowman than likes skating.
- c) One student likes skiing and four students like sledding.
- d) Nine more students like sledding than like skiing.

Justify your answers.

